



INDIAN SCHOOL AL WADI AL KABIR

DEPARTMENT OF MATHEMATICS (2025 – 2026)

TOPIC: ABACUS

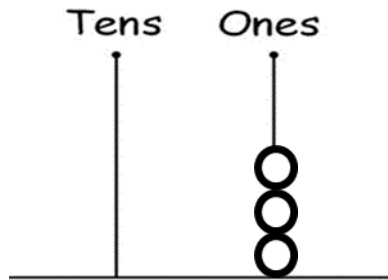
WORKSHEET: 2

RESOURCE PERSON: Mrs. Anuradha Sharma

NAME: _____ CLASS: I SEC: _____ DATE: _____

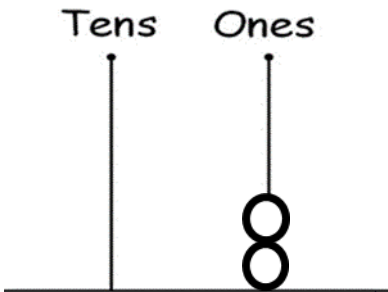
Count the beads on the abacus and write the numeral.

a)



T	O

b)



T	O

Checked by: Academic Coordinator- Class- I
ISWK – Department of Mathematics/2025-2026



INDIAN SCHOOL AL WADI AL KABIR

DEPARTMENT OF MATHEMATICS (2025 – 2026)

TOPIC: ABACUS

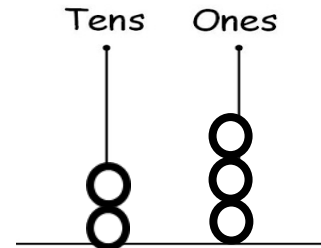
WORKSHEET: 2

RESOURCE PERSON: Mrs. Anuradha Sharma

NAME: _____ CLASS: I SEC: _____ DATE: _____

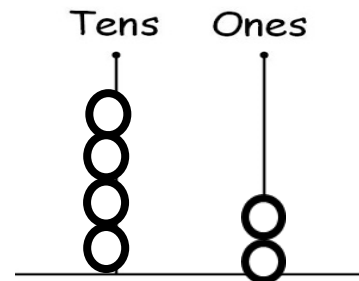
Count the beads on the abacus and write the numeral.

c)



T	O

d)



T	O

Checked by: Academic Coordinator- Class- I
ISWK – Department of Mathematics/2025-2026